


Elevate Your CBSE Mathematics Class 10 Preparation with the 10 In One Study Package

Unveiling the Ultimate Guide for CBSE Mathematics Class 10 Success

Are you a student aspiring to excel in CBSE Mathematics Class 10? Look no further than the exceptional 10 In One Study Package. This comprehensive resource has been meticulously crafted to provide you with everything you need to master the subject, bolster your confidence, and ace the board exam.



10 in One Study Package for CBSE Mathematics Class 10 with Objective Questions & 3 Sample Papers 3rd

Edition by Disha Experts

★★★★☆ 4.2 out of 5

Language : English

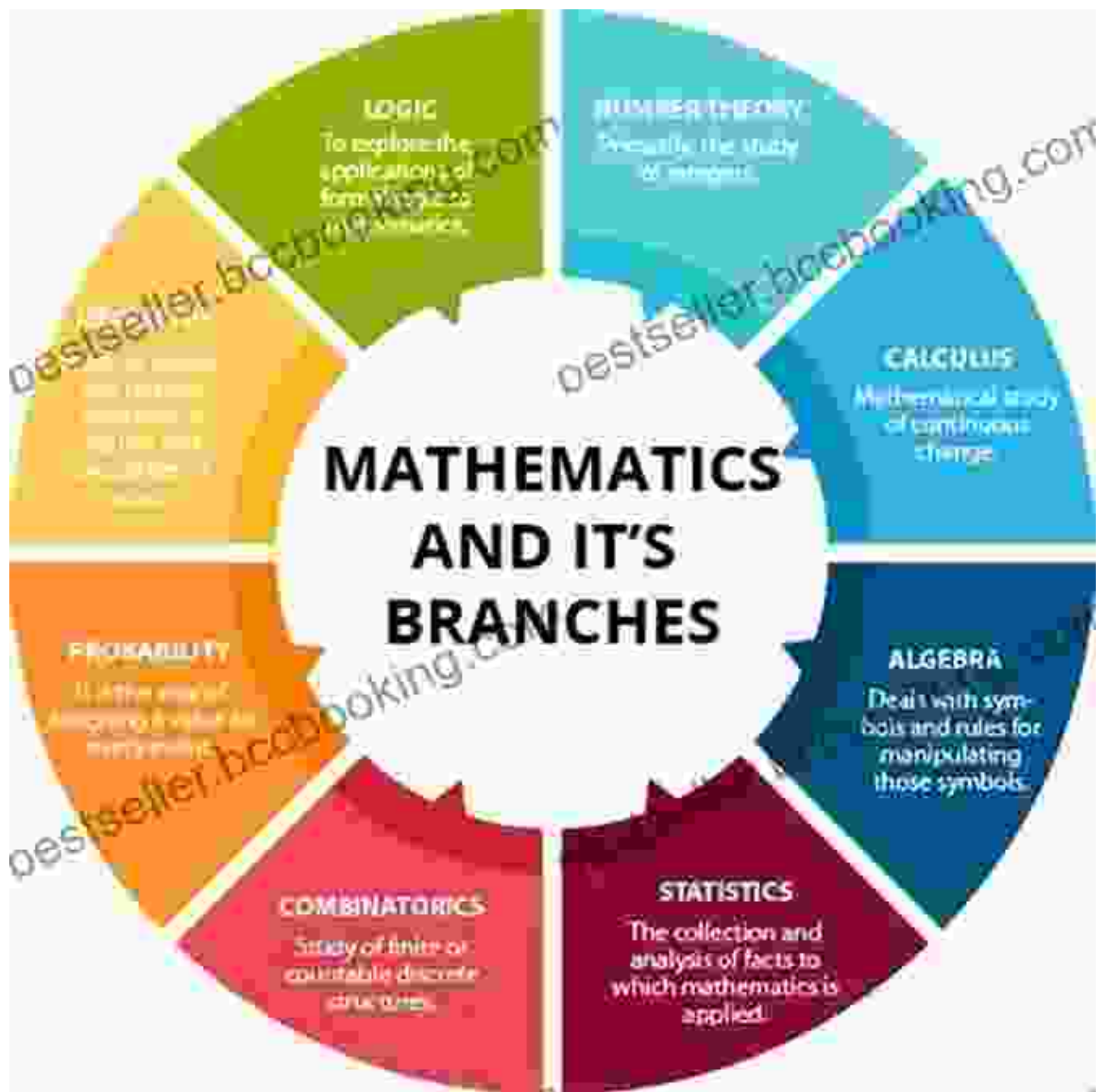
File size : 56816 KB

Screen Reader: Supported

Print length : 76 pages



Master Essential Concepts with In-Depth Explanations



Our study package provides clear and concise explanations of all essential mathematical concepts, covering the entire Class 10 syllabus. Each concept is broken down into manageable chunks, making it accessible and easy to understand.

Enhance Your Skills with a Multitude of Objective Questions

MKTG 3710.001: Summer II (2003): Sample Questions for Exam-2

Sample Multiple Choice Questions

1. Random sampling error:

- A. is the difference between a survey that includes only those who responded and a survey that also includes those who failed to respond.
- B. does not occur if you use probability samples.
- C. results from the failure of a study's design and the inappropriate or random implementation of the sampling process.
- D. is a technical term that applies only to simple random sampling.
- E. is a function of sample size.

2. Which of the following is not a true statement?

- A. The availability of sampling frames varies in different countries.
- B. It is difficult for researchers to build sampling frames in Japan and Taiwan, since those governments do not release census information.
- C. Some nations do not conduct a census of population.
- D. In some countries, census information is available through the local *Inhabitiery Register*.
- E. All of the above are true.

3. Name a sampling procedure in which initial respondents are selected by probability methods, and then additional respondents are obtained from information provided by initial respondents.

- A. Semi-random
- B. Initial
- C. Quota
- D. Snowball

4. A researcher divides the population of product users into three groups based on degree of usage. If the researcher then draws a random sample from each user group independently, she has created a _____ sample.

- A. quota
- B. stratified
- C. judgment
- D. group data
- E. quota

5. Stratified samples may be distinguished from quota samples because with a stratified sample, sample elements are selected:

- A. randomly.
- B. judgmentally.
- C. proportionately.
- D. sequentially.
- E. Sample elements are selected in the same manner for both types of samples.

6. If a researcher wishing to draw a sample from sequentially numbered invoices starts a random starting point, then draws every 50th invoice, he has thus drawn a _____ sample.

- A. simple random
- B. sequential
- C. stratified
- D. systematic
- E. none of the above

7. When a sampling frame has a systematic pattern in the listing of sampling units rather than a random pattern:

- A. a systematic sample must be drawn.

Practice makes perfect! This study package includes a vast collection of objective questions that encompass different levels of difficulty. By solving these questions, you will sharpen your analytical abilities and reinforce your understanding of key concepts.

Simulate the Board Exam Experience with Sample Papers

[Practice Exam] HIM1MTA – 2013, End of Semester Exam.

Section A – Multiple Choice Questions Circle your answer on the exam paper. (25 marks)

1. What is the meaning of adduction?

- a) Bending a part of the body
- b) Turning inward
- c) Moving the part away from the midline
- d) Cutting in half
- e) **Moving the part of the body toward the midline of the body**

2. Janet is an 80 year old woman. She has been admitted to St Wonder Hospital for a sarcomyomectomy. What is she having done?

- a) Removal of tumour of flesh, muscle and bone
- b) Incision of tumour of flesh and muscle
- c) **Removal of tumour of flesh and muscle**
- d) Incision of tumour of flesh, muscle and bone
- e) Removal of flesh and part of the spinal cord

3. Nephrolithotomy means:

- a) Hardening of a stone
- b) Removal of the urinary bladder and kidney stones
- c) Excision of the kidney and stones
- d) Gallbladder puncture
- e) **Incision to remove a renal calculus**

4. A laminectomy is a surgical procedure on what part of the body:

- a) **Spine**
- b) Stomach
- c) Liver
- d) Gall Bladder
- e) Kidneys

5. Fred has lung cancer and recently had a brain seizure. To investigate his seizure, his Oncologist sent him for a/an

- a) ECT
 - b) pulmonary angiogram
 - c) **MRI**
 - d) Barium enema
 - e) IVP
6. The medical term for the upper portion of the stomach:

Prepare yourself for the board exam with our comprehensive sample papers. These mock tests mirror the actual board exam format, providing you with an authentic exam simulation. Solving these papers will boost your confidence and help you identify areas for improvement.

Benefit from Expert Guidance and Support



Our team of experienced educators is here to support you throughout your preparation journey. With instant doubt-clearing and personalized guidance, you can overcome any challenges and maximize your potential.

Convenience and Accessibility at Your Fingertips



Enjoy the convenience of studying anywhere, anytime with our online portal. Access all study material, solve practice questions, and connect with our experts from the comfort of your home.


Empower Yourself with the 10 In One Study Package: Your Path to Success

Don't settle for ordinary study materials. Invest in the 10 In One Study Package for CBSE Mathematics Class 10 and take your preparation to the next level. With its comprehensive coverage, engaging practice questions, expert guidance, and convenient access, this study package is the key to unlocking your mathematical potential and achieving exam success.

Free Download your copy today and embark on a journey to conquer CBSE Mathematics Class 10. Let the 10 In One Study Package be your trusted companion, leading you to a path of academic excellence.

[Free Download Now and Elevate Your CBSE Mathematics Class 10 Preparation!](#)

[Copyright © 2023 \[Your Company Name\]. All Rights Reserved.](#)



10 in One Study Package for CBSE Mathematics Class 10 with Objective Questions & 3 Sample Papers 3rd Edition

by Disha Experts

★★★★☆ 4.2 out of 5

Language : English


File size : 56816 KB

Screen Reader: Supported

Print length : 76 pages

FREE

DOWNLOAD E-BOOK



The Quintessential American Cook: A Culinary Journey with Duncan Hines

Prologue: The Man Behind the Name Duncan Hines, a name synonymous with American dining, was born in 1880 into a humble farming family in Bowling...



Introducing Romanticism: A Literary Guide to the Romantic Era

Romanticism was a literary movement that emerged in the late 18th century and flourished in the early 19th century. It was a reaction against the...

